

# برعاية معالي وزير التربية والتعليم السيد الاستاذ / محمد عبد اللطيف

وتوجيهات مساعد الوزير لشئون تطوير المناهج التعليمية والمشرف  
على الادارة المركزية لتطوير المناهج

**د/ اكرم حسن**

**اداءات وتقييمات**

**Science- grade 6**

**علوم- الصف السادس الابتدائي**

**لجنة الاعداد والمراجعة**

**خبراء مكتب تنمية مادة العلوم**

**اشراف علمي**


**مستشار العلوم**

**د/ عزيزه رجب خليفة**

**ادارة تنمية مادة العلوم**

**2024 - 2025**





## Primary sixth Year – Science

### First Term – ninth Week

#### First unit: What is a system (week test 9-A)

##### Question 1: Complete the following:

- When two muscles work together to carry out a movement, one muscle..... while the other .....

##### Question 2: Write what the following statement refers to

- The pattern formed by iron filling near the magnet. (.....)
- A group of organs that work together to perform a specific function.(.....)

##### Question 3: Give reasons

Most electric wires are covered with rubber or plastic

##### Question 4: What happens if


- When a piece of wood is replaced by a piece of aluminum in an electrical circuit.

.....

الإدارة المركزية لتطوير المناهج  
إدارة تنمية مادة العلوم

2024 - 2025





Primary sixth Year – Science  
First Term – ninth Week



First unit: What is a system

(week test 9-B)

**Question 1: Complete the following:**

- Nutrients and oxygen enter cells through the .....
- Diabetes is a disorder of the endocrine system. In people with diabetes, the ..... does not produce enough insulin.

**Question 2: Write what the following statement refers to**

- A device used to examine very small things. (.....)

**Question 3: Give reasons**


- All metals are considered as electric conductors.


**Question 4: What happens if**

- A patient has a slow or irregular heartbeats.

الإدارة المركزية لتطوير المناهج  
إدارة تنمية مادة العلوم

2024 - 2025





**Primary sixth Year – Science  
First Term – ninth Week**



**First unit: What is a system**

(week test 9-C)

**Question 1: Complete the following:**

- The small structures inside the cell are called.....
- The ..... in the urinary system purify the blood.

**Question 2: Write what the following statement refers to**

- A system that secretes hormones stimulating the rest of the body's system to respond.
- Small electric charges moving in the wires in a closed electrical circuit.

**Question 3: Give reasons**

- Cobalt and nickel are considered as magnetic materials.

الإدارة المركزية لتطوير المناهج  
إدارة تنمية مادة العلوم

2024 - 2025

