

برعاية معالي وزير التربية والتعليم
السيد الاستاذ / محمد عبد اللطيف
وتوجيهات رئيس الادارة المركزية لتطوير المناهج

د/ اكرم حسن

اداءات وتقييمات

Science- grade 6

الصف السادس الابتدائي

لجنة الاعداد والمراجعة

خبراء مكتب تنمية مادة العلوم

اشراف علمي


مستشار العلوم

د/ عزيزه رجب خليفة

الإدارة المركزية لتطوير المناهج
إدارة تنمية مادة العلوم

2024 - 2025





Primary sixth Year – Science
First Term – fourth Week



First unit: What is a system

second concept: The body as a system

(week test 4-A)

Question 1: Complete the following:

The pumps more blood to feed the muscles required for movement.

Question 2: Write what the following statement refers to

Cells need to be shaped like long fibers, which allows for movement.

(.....)

Question 3: Give reasons

- No system in the body can work alone to do a simple task.

Question 4: What happens if

Muscle contraction and relaxation.

.....

Question 5: Determine the right system in the picture in front of you .


لوحة المناهج
إدارة العلوم

2024



الإدارة العامة
إدارة





Primary sixth Year – Science

First Term – fourth Week

First unit: What is a system

second concept: The body as a system

(week test 4-B)



Question 1: Complete the following:

The sends instructions to the muscles.

Question 2: Write what the following statement refers to.

The cell which able to store and use energy quickly. (.....)

Question 3: Give reasons


Cells must vary in shape and size.

Question 4:

Identify four body systems that work together when playing football game.

Question 5: Determine the left system in the picture in front of you.





Primary sixth Year – Science

First Term – fourth Week



First unit: What is a system

second concept: The body as a system

(week test 4-C)

Question 1: Complete the following:

To pick up a glass of water, the..... first see the location of the book.

Question 2 : Write what the following statement refers to.

A system that made up of bones, ligaments, tendons, and cartilage. (.....)

Question 3: Give reasons

Muscle cells need to be shaped like long fibers.

.....

Question 4 :

Identify four body systems that work together when playing basketball game.

.....

Question 5: Determine the name of tissue in the picture in front of you.

