



وزارة التربية والتعليم
الإدارة المركزية لتطوير المناهج
مكتب مستشار الرياضيات

برعاية معالي وزير التربية والتعليم السيد الأستاذ / محمد عبد اللطيف

ونوجيهات رئيس الإدارة المركزية لتطوير المناهج

د / أكرم حسن

إشراف علمي
مستشار الرياضيات

أ / منال عزقول

أداءات و تقييمات

للفص الأول الابتدائي
للعام الدراسي 2024 / 2025
إعداد

أ / علي سيف

أ / صباح عبد الواحد

مراجعة

أ / عماد حسن عمر

ترجمة

أ / رغد محمد عبد العلي

مراجعة الترجمة

أ / دريد علي

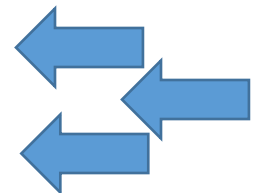
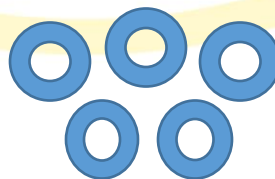
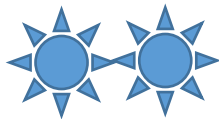


**First grade - first semester - second week - (home performance) -
comparison of things in terms of size, shape and color**

1. Track and write the number:



2. Count and write the appropriate number:



3. Count the dots in each frame and then write the number:



.....

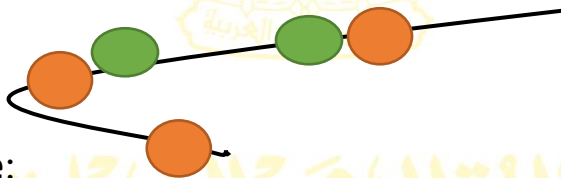
.....



.....

.....

4. Count and write the appropriate number :



5. Circle the larger size:

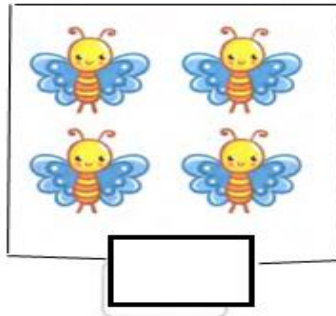


6 - What is the number that comes after the number 4?

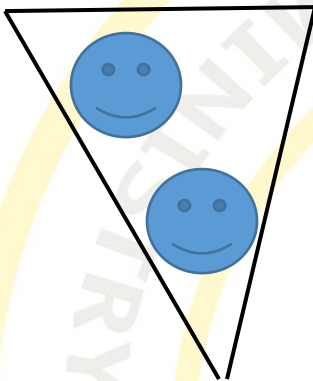
7- Write the missing numbers on the line :



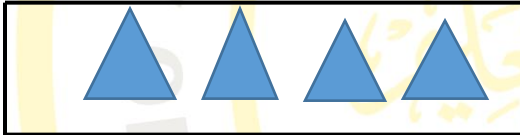
8. How many butterflies are in the picture?




9. Count then match according to the appropriate number



4

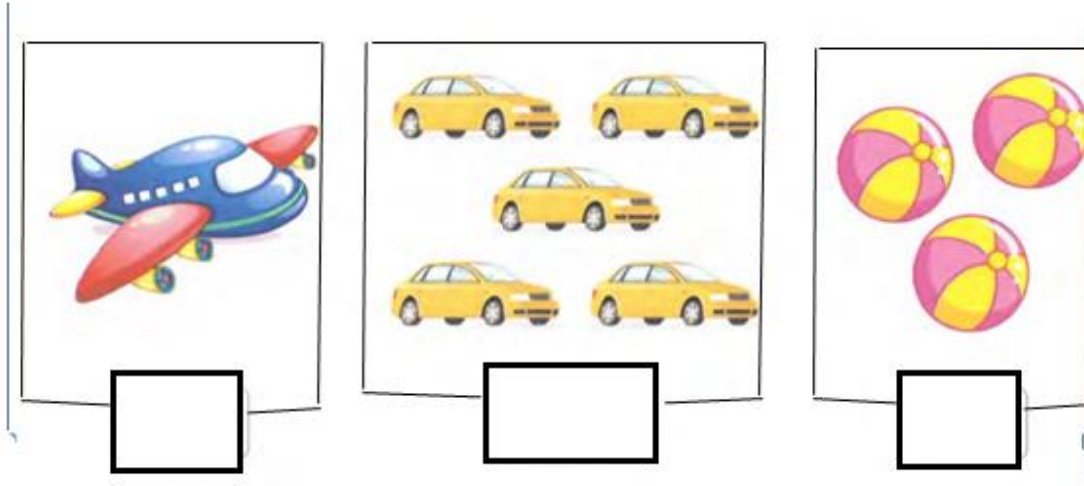


5

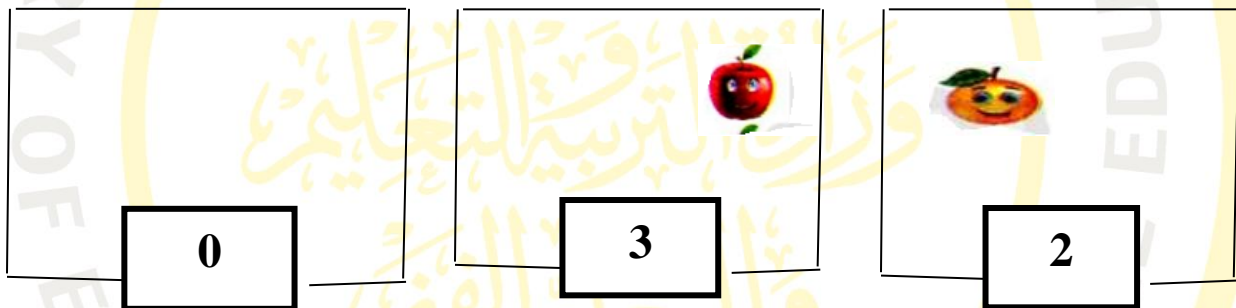


2

10. Count and write the appropriate number :



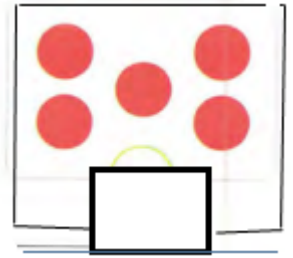


11 – Complete the drawing to get the required number:





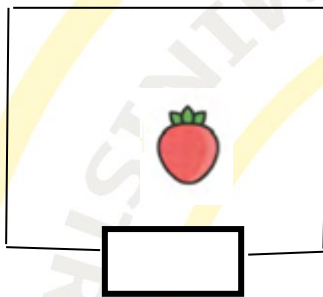
12-Draw a circle around shapes that have the same color :



13. Count and write the appropriate number :



14. Count and write the appropriate number :



15 – Write the number :

